


Outcome 1 - Time Intervals

Bronze examples

Examples...

How long is it from? 


8:30 pm to 10:30 pm = 2 hours

4:45 am to 2:45 pm = 10 hours

0915 to 1515 = 6 hours

Silver example

Examples...

How long is it from? 


3:50 pm to 11:15 pm = 7 hrs 25 mins

10 mins 7 hrs 15 mins

3:50 pm → 4:00 pm → 11:00 pm → 11:15 pm

Gold example

Examples...

How long is it from? 

8:25 am to 9:45 pm = 13 hrs 20 mins











35 mins 12 hrs 45 mins

8:25 am → 9:00 am → 9:00 pm → 9:45 pm

35 mins + 45 mins = 1 hr 20 mins




Bronze Questions

Calculate how long is it from...

- | | |
|--------------------------------------------------------------------------------------------------------|--------------------------------------------------------------------------------------------------------|
|  5:40 am to 10:40 am |  3:20 pm to 9:20 pm |
|  1:50 pm to 5:50 pm |  2:30 am to 10:30 pm |
|  4:25 am to 7:25 pm |  1445 to 1845 |
|  0655 to 0855 |  1315 to 2015 |
|  0340 to 1440 |  2035 to 0035 |











Silver Questions


Calculate how long is it from...

- | | |
|--------------------------------------------------------------------------------------------------------|----------------------------------------------------------------------------------------------------------|
|  4:00 am to 8:25 am |  5:00 pm to 9:30 pm |
|  2:45 pm to 10:50 pm |  6:45 pm to 11:25 pm |
|  3:55 pm to 7:20 pm |  1600 to 2020 |
|  0700 to 1050 |  1210 to 1435 |
|  0630 to 1015 |  1535 to 0010 |

Gold Questions

Calculate how long is it from...

- | | |
|---------------------------------------------------------------------------------------------------------|---------------------------------------------------------------------------------------------------------|
|  7:00 am to 9:00 pm |  5:00 am to 5:20 pm |
|  4:25 am to 8:40 pm |  6:35 am to 11:10 pm |
|  9:55 am to 10:20 pm |  0600 to 1500 |
|  0300 to 1625 |  0615 to 1420 |
|  0630 to 2315 |  2235 to 0520 |

1. Go to the next hour 
2. Go to the hour that you require
3. Go to the time that you require

Bronze Answers

- | | |
|-------------|-------------|
| 1. 5 hours | 2. 6 hours |
| 3. 4 hours | 4. 20 hours |
| 5. 15 hours | 6. 4 hours |
| 7. 2 hours | 8. 7 hours |
| 9. 9 hours | 10. 4 hours |

Silver Answers

- | | |
|------------------|-------------------|
| 1. 4 hrs 25 mins | 2. 4 hrs 30 mins |
| 3. 8 hrs 5 mins | 4. 4 hrs 40 mins |
| 5. 3 hrs 25 mins | 6. 4 hrs 20 mins |
| 7. 3 hrs 50 mins | 8. 2 hrs 25 mins |
| 9. 3 hrs 45 mins | 10. 8 hrs 35 mins |

Gold Answers

- | | |
|-------------------|-------------------|
| 1. 14 hrs | 2. 12 hrs 20 mins |
| 3. 16 hrs 15 mins | 4. 16 hrs 35 mins |
| 5. 12 hrs 25 mins | 6. 9 hrs |
| 7. 13 hrs 25 mins | 8. 8 hrs 5 mins |
| 9. 16 hrs 45 mins | 10. 6 hrs 45 mins |