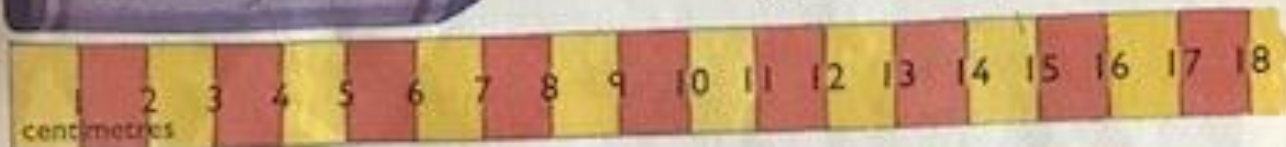





about \_\_\_\_\_ centimetres







Use a ruler. Measure.

 a  \_\_\_\_\_ about \_\_\_\_\_ centimetres

 a  \_\_\_\_\_ about \_\_\_\_\_ centimetres

 a  \_\_\_\_\_ about \_\_\_\_\_ centimetres

Estimate then measure your hand.

	Estimate	Measure
	about _____ centimetres	about _____ centimetres
	about _____ centimetres	about _____ centimetres
	about _____ centimetres	about _____ centimetres
	about _____ centimetres	about _____ centimetres

Find something about 14 centimetres long.