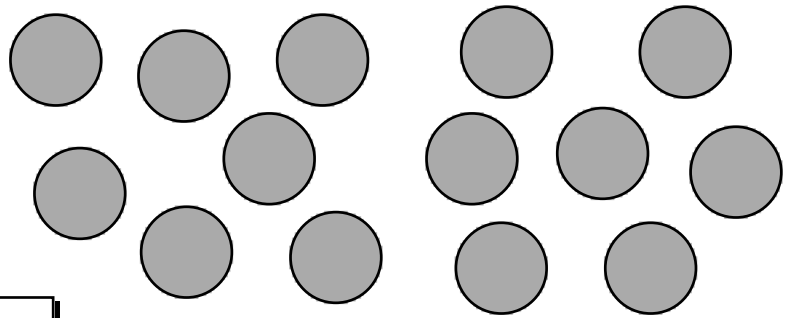



1. David has 14 counters.

- a Draw **round** some of the counters to show how David could share them equally with his friend Tom.



- b How many counters will each boy get ?

2.



- a Draw round these 10 lemons to show how to share them equally between Neil and Tim.


- b How many lemons will Tim get ?

3. This tray of 18 chocolates is to be split equally between Brenda and Liam.


Each of them is to get **half** of the chocolates.

- a Draw round the chocolates to show how Brenda and Liam can get **half** each.

- b How many chocolates will Brenda get ?



4.



- a Draw round these 12 lollies to show how to share them equally between Sara and Anne.

- b How many lollies will Anne get ?

Show this to your teacher