


10. A group of 3 friends take a journey in a taxi
The cost of the journey is £45
They share the cost **equally**



How much does each person pay?

£


-
11. James, Katy, Henry and Erin are going to run a charity cake sale.
They want to make 120 cupcakes in total.



How many cupcakes should each person make?

12. A teacher has 135 sweets.

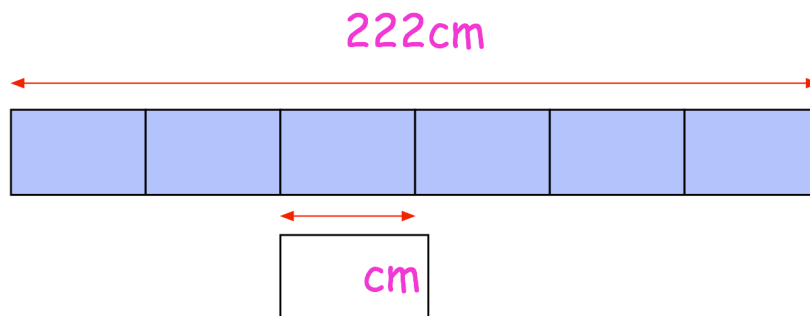
She shares the sweets equally between 5 children.



How many sweets does each child receive?

13. Six identical boxes are placed in a line.

The total length of the six boxes is 222cm




How long is one box?

14. Rosie is paid £8 an hour.

In one week Rosie is paid £264

How many hours did Rosie work?

15. It takes an author 119 days to write a book.



How many weeks is this?

16. Evie buys three pencils



She pays with a **£5 note**.

This is her change.



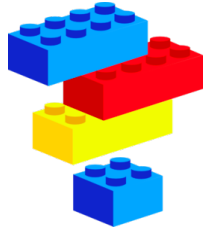
What is the cost of **one** pencil?

p

17. There are 6,000 Lego bricks in a box.

Vicky and Conor take 900 bricks each.


Mollie, Tim and Roger share the rest of the bricks equally



How many Lego bricks does Mollie get?

18. A bag of 6 oranges cost £2.10

A bag of 5 apples cost £1.60



How much **more** does one orange cost than one apple?

