

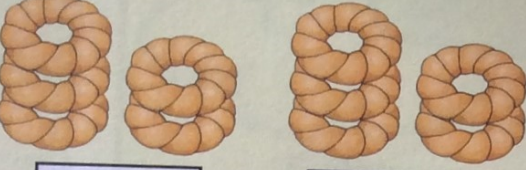



# I can do this.

Add.


$$\square + \square = \square$$


$$\square + \square = \square$$


$$\square + \square = \square$$


$$\square + \square = \square$$

Fill in the numbers.

0	+	6	=	<input type="text"/>
1	+	5	=	<input type="text"/>
2	+	4	=	<input type="text"/>
3	+	3	=	<input type="text"/>
4	+	<input type="text"/>	=	6
5	+	1	=	<input type="text"/>
6	+	<input type="text"/>	=	6

Add.

$$2 + 5 = \square$$

$$3 + 6 = \square$$

$$9 + 1 = \square$$

$$4 + 4 = \square$$

$$2 + 7 = \square$$

$$4 + 2 = \square$$