







Name _____

Date _____



COUNTING MONEY: 2p AND 1p COINS SHEET 1

Count the 1p and 2p coins and write down the totals.

	___ p
	___ p
	___ p
	___ p
	___ p
	___ p

Fill in the correct amounts

$2p + 1p = \underline{\quad} p$

$2p + 1p + 1p + 1p = \underline{\quad} p$

$2p + 2p + 1p = \underline{\quad} p$

$2p + 2p + 2p + 1p + 1p = \underline{\quad} p$

