

Roald Dahl


Maths Challenge Cards



Roald Dahl

Maths Challenge Cards ★★

1. Bean was checking the bottles of cider in his cellar. Last night, he had 30 bottles.. This morning, he has 17 less. How many bottles does he have left?



twinkl.co.uk

Roald Dahl

Maths Challenge Cards ★★

2. Sophie was sleeping in the dormitory. 26 girls had been there in January. By February, 14 had left to find new families. How many girls were left?



twinkl.co.uk

Roald Dahl


Maths Challenge Cards ★★

3. 55 witches attended the meeting held by the Grand High Witch. At the end, 24 returned home. The rest stayed at the hotel. How many stayed?



twinkl.co.uk

4. Mrs Twit kept losing her glass eyes, so she bought a box of 35. She quickly lost 18 of them. How many did she have left?



5. George used 11 different kinds of pill and 13 different kinds of liquid. How many different things go into the medicine?




6. The BFG had a busy night. He trapped 34 good dreams and 18 nightmares. How many dreams did he manage to trap altogether?



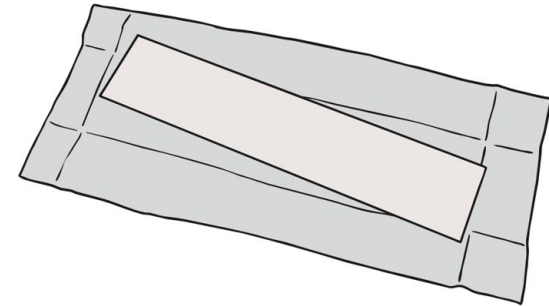
7. The children ate lots of sweets in the Tasting Room. Between them, they ate 20 gobstoppers, 42 whizz ticklers and 13 fizz poppers. How many sweets did they eat altogether?



8. Muggle-Wump finds 23 bananas on one tree and 19 on another. He wants 50 bananas. How many more would he need to find?



9. Violet Beauregard chews through lots of gum. If she chews 2 pieces an hour, how many pieces will she chew in 9 hours?



10. Matilda loves to read. She reads 5 books a week. How many books does she read in 11 weeks?



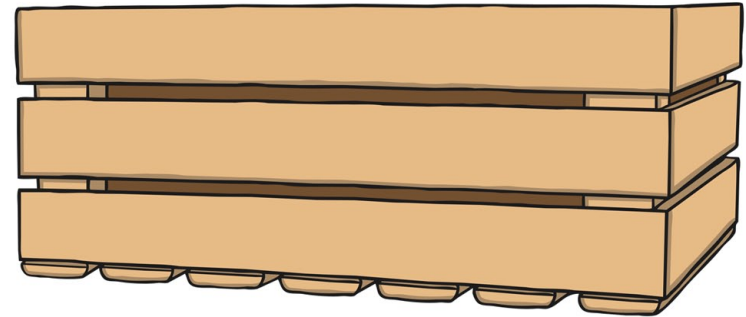
11. Roald Dahl wrote for 5 hours a day. How many hours did he write for each week?




12. The Roly-Poly Bird has 10 feathers in each row. How many feathers does he have in 8 rows?





13. The Grubber has a new delivery of sweets. 60 boxes are shared over 5 floors. How many boxes are sent to each floor?



14. Mr Hoppy has 55 tortoises in his flat. He puts 11 in each room. How many rooms have tortoises in them?



15. Mr Fox, Mrs Fox and the three baby foxes share a meal of 15 geese and 25 chickens. How much do they each eat?



16. There are 21 seeds inside the giant peach. If they put four on each plate, how many seeds would be left over?

