


Rounding to the Nearest

10



Learning Objective: To round to the nearest 10

Which ten is the following number nearest to?

36



30

40

Learning Objective: To round to the nearest 10

Which ten is the following number nearest to?

82



Learning Objective: To round to the nearest 10

Which ten is the following number nearest to?

125




120

130

Learning Objective: To round to the nearest 10

Which ten is the following number nearest to?

980




980

990

Learning Objective: To round to the nearest 10

Which ten is the following number nearest to?

1457




1450

1460

Rounding to the Nearest

100



Learning Objective: To round to the nearest 100

Which hundred is the following number nearest to?

156




100

200

Learning Objective: To round to the nearest 100

Which hundred is the following number nearest to?


215



Learning Objective: To round to the nearest 100

Which hundred is the following number nearest to?

1670



1600

1700

Learning Objective: To round to the nearest 100

Which hundred is the following number nearest to?

1950




1900

2000

Learning Objective: To round to the nearest 100

Which hundred is the following number nearest to?

3370



3300

3400

