


Outcome 1 - Time Intervals

Bronze examples

Examples...




How long is it between...

4:10 am to 4:50 am = 40 minutes


1725 to 1740 = 15 minutes

10:15 pm to 10:35 pm = 20 minutes



Silver examples

Examples...




How long is it between...

4:18 am to 4:39 am = 21 minutes

1722 to 1745 = 23 minutes

10:17 pm to 10:56 pm = 39 minutes



Bronze Questions



Calculate how long it is from...

- | | |
|----------------------|----------------------|
| 1 6:50 am to 6:55 am | 2 2:30 pm to 2:40 pm |
| 3 8:10 pm to 8:45 pm | 4 1:15 am to 1:35 am |
| 5 7:10 pm to 7:55 pm | 6 1935 to 1955 |
| 7 0310 to 0350 | 8 1135 to 1140 |
| 9 1505 to 1540 | 10 1810 to 1840 |

Silver Questions



Calculate how long it is from...

- | | |
|----------------------|----------------------|
| 1 6:42 am to 6:58 am | 2 2:27 pm to 2:49 pm |
| 3 8:18 pm to 8:44 pm | 4 1:16 am to 1:32 am |
| 5 7:06 pm to 7:41 pm | 6 1933 to 1954 |
| 7 0326 to 0358 | 8 1132 to 1149 |
| 9 1515 to 1543 | 10 1809 to 1844 |

Bronze Answers

- | | |
|---------------|----------------|
| 1. 5 minutes | 2. 10 minutes |
| 3. 35 minutes | 4. 20 minutes |
| 5. 45 minutes | 6. 20 minutes |
| 7. 40 minutes | 8. 5 minutes |
| 9. 35 minutes | 10. 30 minutes |

Silver Answers

- | | |
|---------------|----------------|
| 1. 16 minutes | 2. 22 minutes |
| 3. 26 minutes | 4. 16 minutes |
| 5. 35 minutes | 6. 21 minutes |
| 7. 32 minutes | 8. 17 minutes |
| 9. 28 minutes | 10. 35 minutes |