


Outcome 2 - Next hour time intervals

Bronze examples

Examples...




How long is it between...

8:45 am to 9:10 am = 25 minutes


1240 to 1305 = 25 minutes

11:55 pm to 12:20 pm = 25 minutes



Silver examples

Examples...




How long is it between...

7:53 am to 8:08 am = 15 minutes

1945 to 2014 = 29 minutes

9:37 pm to 10:24 pm = 47 minutes



Bronze Questions



Calculate how long it is from...

- | | |
|-----------------------|----------------------|
| 1 8:35 am to 9:05 am | 2 4:45 pm to 5:20 pm |
| 3 2:50 pm to 3:15 pm | 4 6:50 am to 7:05 am |
| 5 9:40 pm to 10:05 pm | 6 1345 to 1430 |
| 7 0840 to 0920 | 8 1050 to 1110 |
| 9 1445 to 1540 | 10 1655 to 1745 |

Silver Questions



Calculate how long it is from...

- | | |
|----------------------|------------------------|
| 1 2:55 am to 3:08 am | 2 5:55 pm to 6:05 pm |
| 3 8:47 pm to 9:11 pm | 4 11:35 am to 12:21 pm |
| 5 6:46 pm to 7:19 pm | 6 1558 to 1603 |
| 7 0438 to 0511 | 8 1042 to 1108 |
| 9 1435 to 1533 | 10 1952 to 2041 |

Bronze Answers

- | | |
|---------------|----------------|
| 1. 30 minutes | 2. 35 minutes |
| 3. 25 minutes | 4. 15 minutes |
| 5. 25 minutes | 6. 45 minutes |
| 7. 40 minutes | 8. 20 minutes |
| 9. 55 minutes | 10. 50 minutes |

Silver Answers

- | | |
|---------------|----------------|
| 1. 13 minutes | 2. 10 minutes |
| 3. 24 minutes | 4. 46 minutes |
| 5. 33 minutes | 6. 5 minutes |
| 7. 33 minutes | 8. 26 minutes |
| 9. 58 minutes | 10. 49 minutes |