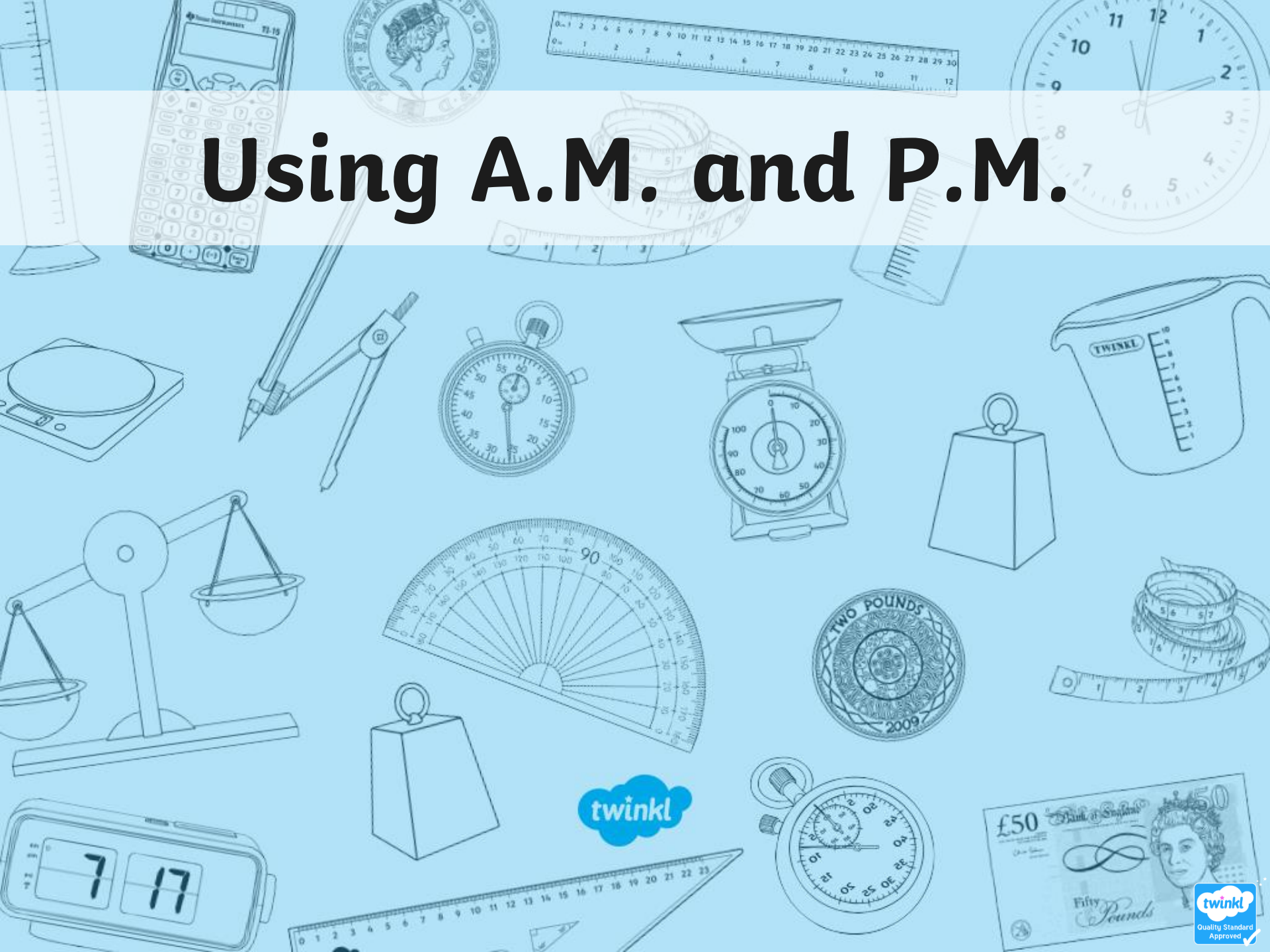




Maths

Measurement

Using A.M. and P.M.



Aim

- I can use a.m. and p.m. to say whether things happen before or after noon.

Success Criteria

- I can use 'a.m.' to describe times from midnight to midday.
- I can use 'p.m.' to describe times from midday to midnight.

Digital Times



Write the time in numbers and words on a whiteboard.



5 past 5

Digital Times



Write the time in numbers and words on a whiteboard.

25 past
12

Digital Times



Write the time in numbers and words on a whiteboard.



25 to 4

Digital Times



Write the time in numbers and words on a whiteboard.

20 to 9

Digital Times



Write the time in numbers and words on a whiteboard.



5 past 11

Digital Times



Write the time in numbers and words on a whiteboard.



5 to 1

Digital Times



Write the time in numbers and words on a whiteboard.

10 past 3

Digital Times



Write the time in numbers and words on a whiteboard.

quarter to
5

Times of the Day



There are 24 hours in a day, but there are only 12 hours on a clock.


We tell the time by splitting the 24 hours into two.

12 o'clock at night is called midnight.

12 o'clock in the day is called midday, or noon.

The time between midnight and midday is referred to as a.m..

The time from midday to midnight is referred to as p.m..






Times of the Day

The day is split into different parts, like the chapters of a book.

Some events might happen at both a.m. and p.m. times.



A.M. or P.M. or Both?




Hold up the correct Timings Card to show when this event happens.



A.M. or P.M. or Both?




Hold up the correct Timings Card to show when this event happens.



A.M. or P.M. or Both?




Hold up the correct Timings Card to show when this event happens.



A.M. or P.M. or Both?




Hold up the correct Timings Card to show when this event happens.



A.M. or P.M. or Both?




Hold up the correct Timings Card to show when this event happens.



A.M. or P.M. or Both?




Hold up the correct Timings Card to show when this event happens.



A.M. or P.M. or Both?




Hold up the correct Timings Card to show when this event happens.



A.M. or P.M. or Both?



Hold up the correct Timings Card to show when this event happens.



Writing Times Using A.M. and P.M.

Whole Class

Mostly, we use a.m. or p.m. when reading and writing digital times.



Writing Times Using A.M. and P.M.




Can you change these written times to digital times?



Writing Times Using A.M. and P.M.

Whole Class


Can you change these written times to digital times?



Writing Times Using A.M. and P.M.

Whole Class

Can you change these written times to digital times?




How would you write 5 to 4 in the afternoon?

3:55 p.m.

Writing Times Using A.M. and P.M.




Can you change these written times to digital times?



Writing Times Using A.M. and P.M.



Can you change these written times to digital times?



Writing Times Using A.M. and P.M.




Can you change these written times to digital times?



Writing Times Using A.M. and P.M.

Whole Class

Can you change these written times to digital times?





TV Schedule

Here is a TV schedule, starting at 9 o'clock in the morning.

Time	Programme
9 o'clock	Ben 12
20 past 9	Tim and Jerry
5 to 10	Film: Toy Tale
quarter to 12	Finney and Fern
quarter past 12	Scoody Boo
20 to 1	Sponge Bill
10 past 1	Loopy Tunes
10 to 2	Film: Shrep
4 o'clock	School of Pop





TV Schedule

Change the times to digital times, using a.m. and p.m..

Time	Digital a.m./p.m.	Programme
9 o'clock	9:00 a.m.	Ben 12
20 past 9	9:20 a.m.	Tim and Jerry
5 to 10	9:55 a.m.	Film: Toy Tale
quarter to 12	11:45 a.m.	Finney and Fern
quarter past 12	12:15 p.m.	Scoody Boo
20 to 1	12:40 p.m.	Sponge Bill
10 past 1	1:10 p.m.	Loopy Tunes
10 to 2	1:50 p.m.	Film: Shrep
4 o'clock	4:00 p.m.	School of Pop



TV Schedule

How long does Scooby Boo last?

25 minutes

Time	Programme
9:00 a.m.	Ben 12
9:20 a.m.	Tim and Jerry
9:55 a.m.	Film: Toy Tale
11:45 a.m.	Finney and Fern
12:15 p.m.	Scoody Boo
12:40 p.m.	Sponge Bill
1:10 p.m.	Loopy Tunes
1:50 p.m.	Film: Shrep
4:00 p.m.	School of Pop





TV Schedule

How long does Loopy Tunes last?

40 minutes

Time	Programme
9:00 a.m.	Ben 12
9:20 a.m.	Tim and Jerry
9:55 a.m.	Film: Toy Tale
11:45 a.m.	Finney and Fern
12:15 p.m.	Scoody Boo
12:40 p.m.	Sponge Bill
1:10 p.m.	Loopy Tunes
1:50 p.m.	Film: Shrep
4:00 p.m.	School of Pop





TV Schedule

How long does Tim and Jerry last?

35 minutes

Time	Programme
9:00 a.m.	Ben 12
9:20 a.m.	Tim and Jerry
9:55 a.m.	Film: Toy Tale
11:45 a.m.	Finney and Fern
12:15 p.m.	Scoody Boo
12:40 p.m.	Sponge Bill
1:10 p.m.	Loopy Tunes
1:50 p.m.	Film: Shrep
4:00 p.m.	School of Pop





TV Schedule


How long does Toy Tale last?

1 hour and 50
minutes
(110 minutes)

Time	Programme
9:00 a.m.	Ben 12
9:20 a.m.	Tim and Jerry
9:55 a.m.	Film: Toy Tale
11:45 a.m.	Finney and Fern
12:15 p.m.	Scoody Boo
12:40 p.m.	Sponge Bill
1:10 p.m.	Loopy Tunes
1:50 p.m.	Film: Shrep
4:00 p.m.	School of Pop



Using A.M. and P.M.



Use your terrific time skill to complete these activity sheets:

The collage shows six activity sheets with the following content:

- Sheet 1:** 4) Answer these questions: a) How long does it take to get to school? b) How long does it take to get home? c) How long does it take to get to bed? d) How long does it take to get up?
2) Order these times: 7:20 p.m., 6:15 a.m.
earliest
- Sheet 2:** 1) Write these times on the clock: a) 8:05 (5 past 8), d) 20 to 3, g) 5 to 8
3) Fill in the chart:
school starts
home time
geography
lunch time
maths
playtime
- Sheet 3:** 2) Order these times: 2:30 p.m., 7:10 a.m.
earliest
1) Write these times on the clock: a) 11:05 (5 past 11), d) 10 to 9, g) 5 to 7
3) Write these school times:
school starts
literacy
reading
playtime
maths
lunch time
R.E.
science
Spanish
home time
4) Answer these questions: a) How long does it take to get to school? b) How long does it take to get home? c) How long does it take to get to bed?
- Sheet 4:** 2) Say whether things happen before or after noon:
a) Coming home from school
b) Eating your breakfast
c) Having a shower
d) Going to bed
e) Brushing your teeth
f) Going shopping
g) The sun coming up
h) The sun going down
3) Write these school times:
school starts
maths
reading
playtime
literacy
lunch time
P.E.
history
French
home time
- Sheet 5:** Using A.M. and P.M.
I can use a.m. and p.m. to say whether things happen before or after noon.
1) Convert these digital times into analogue times. One has been done for you.
a) 11:00 (11 o'clock)
b) 12:30
c) 04:15
d) 08:00
e) 03:45
f) 08:30
g) 11:15
h) 04:30
i) 05:45

Feeding Time at the Zoo



This is the schedule for feeding the different animals at the Zoo.

Animal	Start of feeding time	End of feeding time
penguins	9:05 a.m.	9:45 a.m.
tigers	10:20 a.m.	10:55 a.m.
chimpanzees	11:35 a.m.	12:10 p.m.
farm animals	12:55 p.m.	1:20 p.m.
sea lions	1:35 p.m.	2:00 p.m.

How long does feeding the penguins last?

40 minutes

Feeding Time at the Zoo



This is the schedule for feeding the different animals at the Zoo.

Animal	Start of feeding time	End of feeding time
penguins	9:05 a.m.	9:45 a.m.
tigers	10:20 a.m.	10:55 a.m.
chimpanzees	11:35 a.m.	12:10 p.m.
farm animals	12:55 p.m.	1:20 p.m.
sea lions	1:35 p.m.	2:00 p.m.

How long does feeding the chimpanzees last?

35 minutes

Feeding Time at the Zoo



This is the schedule for feeding the different animals at the Zoo.

Animal	Start of feeding time	End of feeding time
penguins	9:05 a.m.	9:45 a.m.
tigers	10:20 a.m.	10:55 a.m.
chimpanzees	11:35 a.m.	12:10 p.m.
farm animals	12:55 p.m.	1:20 p.m.
sea lions	1:35 p.m.	2:00 p.m.

Which takes longer, feeding the farm animals or feeding the tigers?

Feeding the tigers.


Aim



- I can use a.m. and p.m. to say whether things happen before or after noon.

Success Criteria

- I can use 'a.m.' to describe times from midnight to midday.
- I can use 'p.m.' to describe times from midday to midnight.



twinkl