





Outcome 2 - Missing Symbols

Bronze examples

Examples...

What is the value of the missing symbols represented by shapes below?



7  2 = 9  = '+'



10  3 = 7  = '-'

Silver examples

Examples...

What is the value of the missing symbols represented by shapes below?

5  2 = 10  = 'x'

16  2 = 8  = '÷'

Bronze Questions

What is the value of the missing symbols represented by shapes below?



- 1  4 = 3 2  4 = 7
- 3  2 = 6 4  8 = 9
- 5  8 = 6 6  14 = 0
- 7  6 = 1 8  9 = 10









Silver Questions

What is the value of the missing symbols represented by shapes below?











- 1  4 = 28 2  5 = 1
- 3  9 = 54 4  3 = 3
- 5  2 = 9 6  8 = 64
- 7  6 = 4 8  4 = 12

Bronze Answers

- | | |
|--|--|
| 1.  = '1' | 2.  = '4' |
| 3.  = '4' | 4.  = '4' |
| 5.  = '1' | 6.  = '1' |
| 7.  = '1' | 8.  = '1' |

Silver Answers

- | | |
|--|--|
| 1.  = 'x' | 2.  = '1/2' |
| 3.  = 'x' | 4.  = 'x' |
| 5.  = '1/2' | 6.  = 'x' |
| 7.  = '1/2' | 8.  = '1/2' |