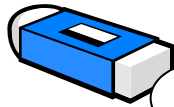


Money Word Problems

O.L..I : To solve one-step problems involving *money*.



78p



31p



67p



46p



55p



34p



39p

Stationery Shop

1. If you buy a rubber and a bag, how much will it cost?

2. Saira bought two pencils and a calculator, how much did it cost altogether?

3. How much will it cost if Tabiha bought a paper clip, a ruler and a pencil?

4. If you bought two bags, a pencil and a ruler, how much would you have to pay?

5. Mariya bought two books, one pencil and a ruler, how much did she spend?

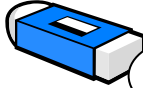
6. How much change will you get from £1 if you bought a calculator for 67p?

Money Word Problems

O.L..I : To solve one-step problems involving *money*.



47p



41p



99p



86p



75p



49p



69p

Stationery Shop

1. If you buy a rubber for 47p, a book for 75p and a bag for 86p, how much will it cost?

2. Ani bought two pencils and a calculator, how much did it cost altogether?

3. How much will it cost if Kairi bought a paper clip, a ruler, a pencil and a rubber?

4. If you bought two bags for 86p, a pencil for 47p and two rulers for 69p, how much would you have to pay?

5. Nyasha bought two books, two pencils, a bag and a ruler, how much did she spend?




6. How much change will you get from £1.75 if you bought a paper clip?

7. Muadh bought a pencil and a calculator. How much change will he get from £2.50?

8. How much will it cost if Shanique bought all the items?

Money Word Problems

O.L..I : To solve one-step problems involving *money*.



Snack Shop

1. How much will it cost if you buy two pizzas for 23p and a packet of crisp for 12p?

2. Mahima bought a sweet for 9p, a burger for 21p and a glass of juice for 15p, how much did she spend?

3. How much will it cost if Hafsah bought a chocolate bar for 18p, a cake for 20p and a glass of juice for 15p?



4. A pizza cost 23p. I pay for it with a 50p coin. How much change will I get?

5. Christian bought two cakes, a pizza and a chocolate bar, how much did she spend?

6. How much change will you get from 50p if you bought a chocolate bar for 18p?

Money Word Problems

O.L..I: To solve one-step and two-step problems involving money.



Snack Shop

1. A pizza cost 43p. I pay for it with a £1 coin.
How much change will I get?

2. George bought a sweet for 19p, a burger for 43p and a glass of juice for 25p, how much change will he get from £3?

3. How much will it cost if Mariya bought two chocolate bars for 28p each, a cake for 30p and a glass of juice for 25p?



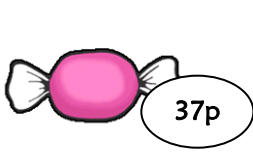
4. Daphne had £2 to spend, she bought two packets of crisps for 32p, a sweet for 19p and a burger for 51p. How much did she have left?

5. Aamna bought two cakes, a pizza and a chocolate bar, how much change will she get from £2.50?

6. How much change will you get from £3.75 if you bought three burgers for 51p?

Money Word Problems

O.L..I: To solve one-step and two-step problems involving money.



Snack Shop

| | |
|---|---|
| <p>1. Nyasha has £2.50 to spend. She bought a pizza which cost 87p. How much does she have left?</p> | <p>2. Zenel bought 2 burgers, a cake and a glass of juice, how much change will he get from £5?</p> |
| <p>3. How much will it cost if Ani bought two chocolate bars, a pizza and a packet of crisp?</p> | <p>4. Hasnain had £3.69 to spend, he bought 2 cakes, a sweet and a burger. How much did he have left?</p> |
| <p>5. Anisah bought 2 glasses of juice, a pizza and a chocolate bar, how much change will she get from £4.80?</p> | <p>6. How much change will you get from £5.75 if you bought four burgers for 99p?</p> |
| <p>7. Mann bought 3 slices of pizzas and 3 chocolate bars, how much change will he get from £7.65?</p> | <p>8. How many different snacks can Shanique buy with £3.43? How much will she have left?</p> |

Money Word Problems

O.L.I.: To solve one-step problems involving *money*.



7p



10p



8p



15p



12p



16p



11p



9p

Fruit Shop

1. An apple cost 7p. I pay for it with a 20p coin. How much change will I get?

2. Usman bought a banana for 15p and a melon for 9p, how much did he spend altogether?

3. How much will it cost if Olga bought a bunch of grapes, a strawberry and a pear?

4. If you bought a bunch of cherries for 16p, and a slice of melon for 9p, how much would you have to pay?

5. Masoumeh bought two apples, an orange and a strawberry, how much did she spend?

6. How much change will you get from 30p if you bought a banana for 15p?

Money Word Problems

O.L..I: To solve one-step problems involving *money*.



19p



21p



14p



26p



13p



16p



15p



28p

Fruit Shop

1. An apple cost 19p. How much change will you get from 37p?

2. Hafsah bought a banana for 26p and an orange for 21p, how much did she spend altogether?

3. How much will it cost if Mahima bought a bunch of grapes, a strawberry and a pear?

4. If you bought a bunch of cherries for 16p, and a slice of melon for 28p, how much would you have to pay?

5. Christian bought two apples, an orange and a strawberry, how much did he spend?

6. How much change will you get from 50p if you bought a banana for 26p?